
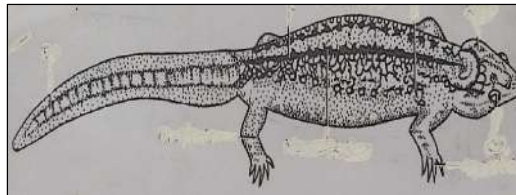


2020
UNIVERSITY OF CALCUTTA
CITY COLLEGE CENTER
ZOOLOGY – HONOURS PRACTICAL
PART II SEM-3
PAPER: CC 5-PR
FULL MARKS: 30

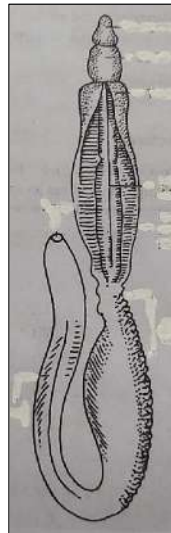
1. Identify with reasons and systematic position of the four specimens marked as A, B, C, and D. 4x5=20



A



B



C



D

2. Draw and label the digestive system of *Tilapia*.